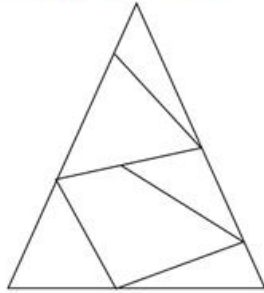



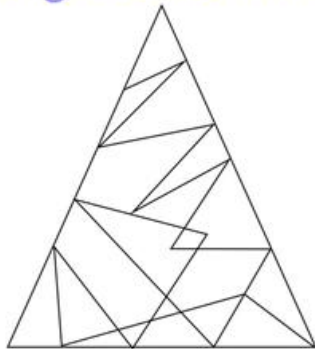
Find out the correct numbers ?

1. Find out how many different types of triangles are hiding in this big triangle ?



15 triangles

2. Find out how many different types of triangles are hiding in this big triangle ?



3. Find out how many complete circles, stars and ellipse are hiding in this big circle ?

