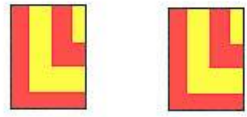




Dear children ! count each group of pictures then count them together


$$1 + 1 = \underline{\quad}$$


$$2 + 1 = \underline{\quad}$$


$$2 + 2 = \underline{\quad}$$


$$3 + 2 = \underline{\quad}$$