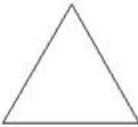
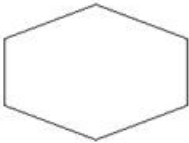

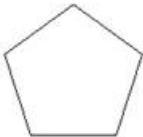



## Geometric Shapes & their sides

Identify the no. of sides in the given geometric shapes and color the corresponding answer given on the right hand side.

	Geometric Shapes	Answers			
1.		<input type="radio"/> 1	<input type="radio"/> 3	<input type="radio"/> 4	<input type="radio"/> 5
2.		<input type="radio"/> 4	<input type="radio"/> 3	<input type="radio"/> 0	<input type="radio"/> 6
3.		<input type="radio"/> 3	<input type="radio"/> 4	<input type="radio"/> 5	<input type="radio"/> 6
4.		<input type="radio"/> 5	<input type="radio"/> 3	<input type="radio"/> 7	<input type="radio"/> 4
5.		<input type="radio"/> 3	<input type="radio"/> 0	<input type="radio"/> 4	<input type="radio"/> 5

---

Get more printables, worksheets, coloring pages, activities and student projects:  
[www.StudyVillage.com](http://www.StudyVillage.com)