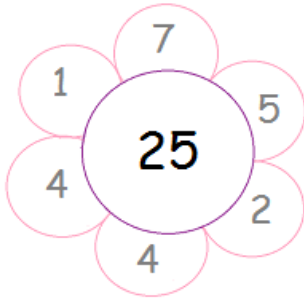
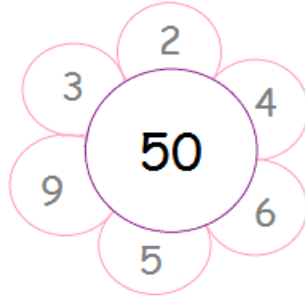


## Addition & Subtraction Worksheet

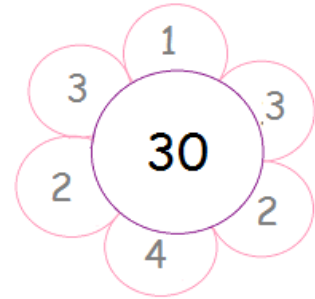
Add the numbers given in the petals of the flowers and then subtract them from the number given in the center of the flower. Write the answers in the given boxes.



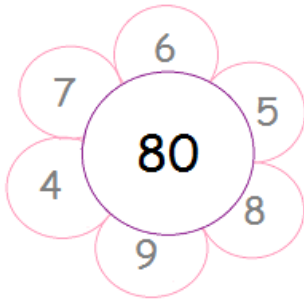
$$25 - (7+5+2+4+4+1) = 2$$



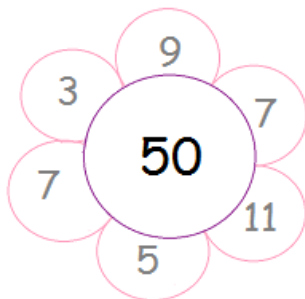
$$50 - (2+4+6+5+9+3) = \square$$



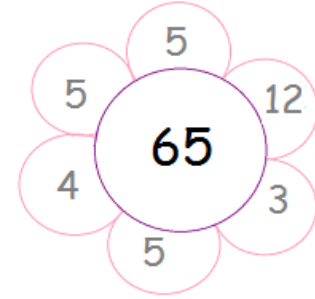
$$30 - (1+3+2+4+2+3) = \square$$



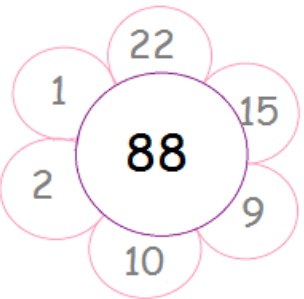
$$80 - (6+5+8+9+4+7) = \square$$



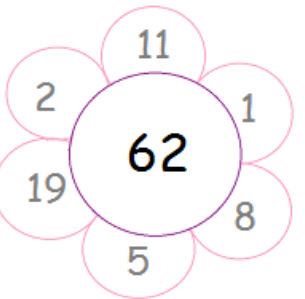
$$50 - (9+7+11+5+7+3) = \square$$



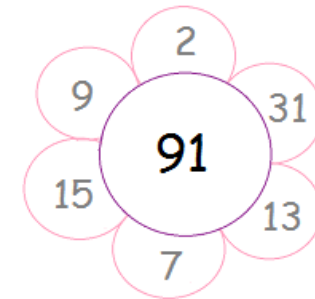
$$65 - (5+12+3+5+4+5) = \square$$



$$88 - (22+15+9+10+2+1) = \square$$



$$62 - (11+1+8+5+19+2) = \square$$



$$91 - (2+31+13+7+15+9) = \square$$