






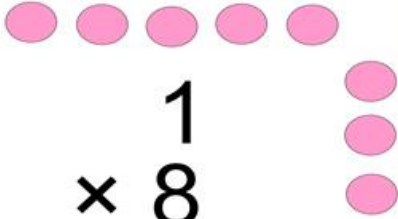
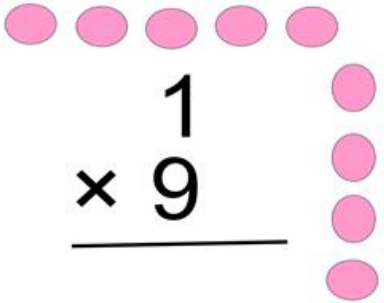
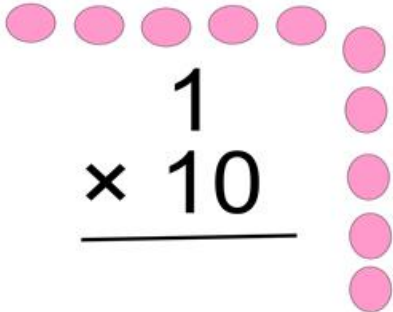


Count the pictures and write the correct answer for each multiplication.

	$\begin{array}{r} 1 \\ \times 1 \\ \hline 1 \end{array}$
--	--

 $\begin{array}{r} 1 \\ \times 2 \\ \hline \end{array}$	 $\begin{array}{r} 1 \\ \times 3 \\ \hline \end{array}$	 $\begin{array}{r} 1 \\ \times 4 \\ \hline \end{array}$
 $\begin{array}{r} 1 \\ \times 5 \\ \hline \end{array}$	 $\begin{array}{r} 1 \\ \times 6 \\ \hline \end{array}$	 $\begin{array}{r} 1 \\ \times 7 \\ \hline \end{array}$
 $\begin{array}{r} 1 \\ \times 8 \\ \hline \end{array}$	 $\begin{array}{r} 1 \\ \times 9 \\ \hline \end{array}$	 $\begin{array}{r} 1 \\ \times 10 \\ \hline \end{array}$